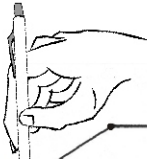
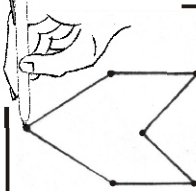
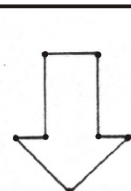

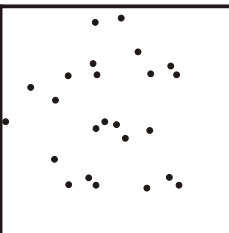


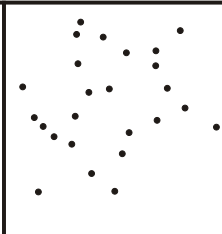


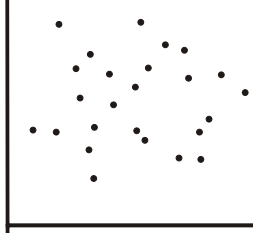
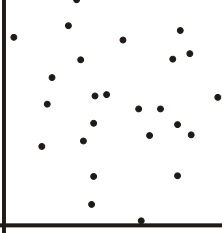
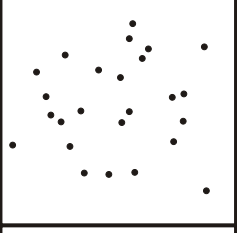

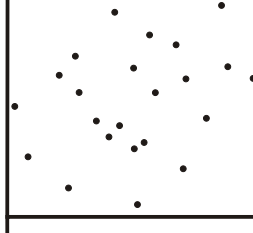
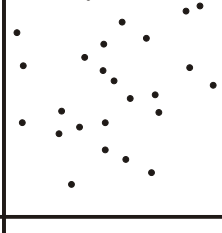
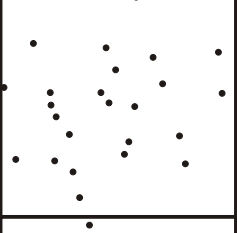







TALLERES

A continuación se presentan los talleres que se desarrollan en la asignatura: Desarrollo del Pensamiento Lógico Matemático

DESARROLLO DEL PENSAMIENTO LÓGICO MATEMÁTICO TALLER No. 1



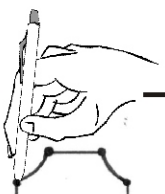
				
				
				
				
				

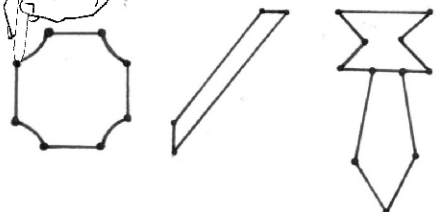
















DESARROLLO DEL PENSAMIENTO LÓGICO MATEMÁTICO
TALLER No. 3

Complete la serie llenando el cuadro con el número o letras que correspondan en cada una de ellas

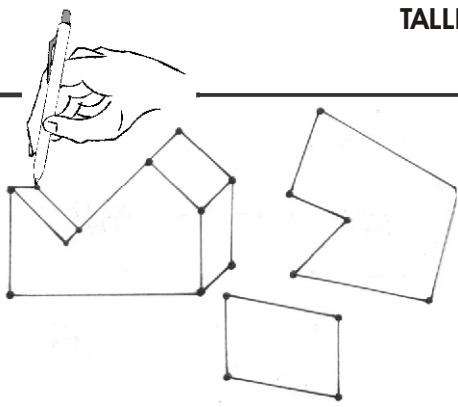
1	4	1	5	
7	14	28	56	
99	86	73	60	
12	36	24	72	
5	18	31	44	
70	71	73	74	
ABC	OPQ	DEF	RST	
LAS	SAL	ASL	LSA	
1,2,3	7,8,9	13,14,15	19,20,21	
96	78	60	42	
10	3.16	1.77	1.33	
80	20	5	1.25	
100	25	6.25	1.56	
63	55	47	39	

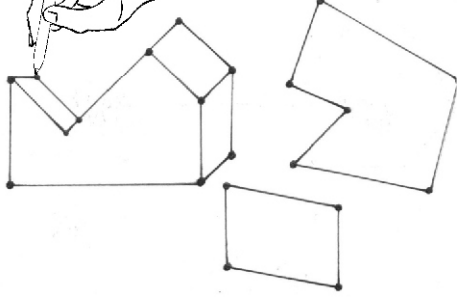







DESARROLLO DEL PENSAMIENTO LÓGICO MATEMÁTICO
TALLER No. 4



DESARROLLO DEL PENSAMIENTO LÓGICO MATEMÁTICO
TALLER No. 6



DESARROLLO DEL PENSAMIENTO LÓGICO MATEMÁTICO
TALLER No. 12

Complete los cuadros del 1 al 3 con números del 1 al 9 y los cuadros del 4 al 6 con números del 11 al 19 de modo tal que al sumarse en sentido horizontal, vertical y diagonal corresponda con el número indicado.

1.

			11
			19
	1		17
			9
19	9	17	11

4.

			43
			45
	11		45
			45
43	40	52	40

2.

			15
			18
	2		12
			15
12	17	16	7

5.

			50
			42
	17		50
			43
44	44	47	42

3.

			9
			12
	3		18
			15
15	12	18	15

6.

			48
			41
	18		50
			44
44	41	50	50